



UGANDA NATIONAL EXAMINATIONS BOARD

**PRIMARY LEAVING EXAMINATION**

**2019**

**SOCIAL STUDIES WITH RELIGIOUS EDUCATION**

*Time Allowed: 2 hours 15 minutes*

Cand. No. 

--	--	--	--	--	--	--	--	--

Candidate's Name .....

Candidate's Signature .....

School Random Number .....

District Random Number .....

Read the following instructions carefully:

1. The paper has two sections: **A** and **B**.  
Section **A** has 40 questions and Section **B** has 15 questions.
2. Answer **all** questions. **All** answers to both Sections **A** and **B** must be written in the spaces provided.
3. All answers must be written using a **blue** or **black** ball point pen or ink. Diagrams should be drawn in pencil.
4. Unnecessary changes in your work may lead to loss of marks.
5. Any handwriting that cannot be easily read may lead to loss of marks.
6. Do **not** fill anything in the table indicated:

FOR EXAMINERS' USE ONLY		
Qn. No	MARKS	EXR'S. No.
1 – 10		
11 – 20		
21 – 30		
31 – 40		
41 – 43		
44 – 46		
47 – 49		
50 – 52		
53 – 55		
<b>TOTAL</b>		

“For Examiner’s use only” and boxes inside the question Paper

SECTION A: 40 MARKS

Questions 1 to 40 carry one mark each

1. Name the ocean that lies to the east of East Africa.

.....  
.....

2. Why should every school have a head teacher?

.....  
.....

3. How has the discovery of crude oil negatively affect people living in Albertine region?

.....  
.....

4. Mention **one** importance of rocks in an area.

.....  
.....

5. Name any **one** exotic breed of cattle kept in a ranch.

.....  
.....

6. How did the coming of missionaries help to stop slave trade in East Africa?

.....  
.....

7. State the main service provided by teachers to the community.

.....  
.....

8. Give **one** reason why some wild animals are getting endangered in the game parks of Uganda.

.....  
.....

9. Why do crop farmers always harvest their crops in dry season?

.....  
.....

10. Give **one** reason why Uganda government is encouraging all Ugandan citizens to register for National Identity Cards.

.....  
.....

11. State the importance of a barometer at the weather station.

.....  
.....

12. Why is Uganda called a landlocked country?

.....  
.....

13. In which way is prioritizing an important aspect when making a family budget?

.....  
.....

14. Name the **main** food crop grown in Doho Irrigation scheme.

.....

15. How is wind formed?

.....  
.....


16. Why is crop growing not common in Karamoja region?

.....  
.....

17. Mention one factor that favours Cocoa growing in Ghana.

.....

The diagram below show a common vehicle in the society. Use it to answer question 18.



18. How does the community benefit from having the vehicle above?

.....  
.....


19. State one way mountains hinder effective communication in an area.

.....  
.....

20. H.E. President Abdel Fattah el-Sisi is the current chairperson of African Union. From which country does he come from?

.....  
.....

21. Why is animal husbandry rarely practised in Miombo woodlands of Tanzania?



.....  
.....

22. Name the manmade water way that connects Mediterranean sea to Red sea.

.....

23. Give any **one** importance of a clan in a kingdom like Buganda.

.....

.....

24. Why did Omukama Kabalega of Bunyoro resist British rule in his empire?

.....

.....

25. Why does River Nile flow towards the North?

.....

.....

26. How does the growing of pyrethrum help in control of mosquitoes?

.....

.....

27. Why does National Environment Management Authority (NEMA) prohibit swamp drainage?

.....

.....

28. Give **one** reason why people in desert areas put on turbans.

.....

.....

29. Why is Lake Katwe salty?

.....

.....

30. Give **one** reason why the Bachwezi are greatly remembered in the history of Uganda.

.....

31. Why did the Portuguese build Fort Jesus?



.....  
.....

32. It is Tuesday on the west of International Date Line. If a person on the west crosses the date line to its east today, what day is it in the east?

.....

33. How can people around Mount Elgon protect themselves against the effects of landslides and mudslides?

.....  
.....

34. State **one** reason why African leaders were not invited to the Berlin conference of 1884 to 1885.

.....  
.....

35. Of what importance are CCTV cameras put on Highways in most African countries?

.....  
.....

For each of the questions **36** to **40**, answer **EITHER** the Christian **OR** the Islamic questions but **not** both. **No** marks will be awarded to a candidate who attempts **both alternatives** in a particular number.

36. **EITHER:**

What do we call the celebration that marks the end of Lent period?

.....

**OR:**

What do we call the celebration that marks the end of Ramadhan?

.....

37. **EITHER:**

Who was the last Prophet in the Holy Bible?

.....

**OR:**

Who was the last Prophet in the Holy Quran?

.....

38. **EITHER:**

State **one** reason why a Christian should marry someone in presence of elders.

.....  
.....

**OR:**

State **one** reason why Muslims are encouraged to make Nikkah.

.....  
.....

39. **EITHER:**

Name any **one** type of prayer in Christian faith.

.....

**OR:**

Name any **one** type of Salah in Islamic faith.

.....

40. EITHER:

State the role of a priest in the society.

.....  
.....

OR:

State the role of an imam in the society.

.....  
.....

**SECTION B: 60 MARKS**

--

Questions 41 to 55 carry four marks each

41. (a) Which African country is not a member state of African Union (AU).

.....

(b) Why are the following people remembered in the history of Africa?

(i) Mzee Jomo Kenyatta

.....  
.....

(ii) Kofi Atta Annan

.....  
.....

(c) State **one** role of the African Union to its member countries.

.....

42. (a) What term refers to the great movement of Boers from the Cape Colony into the interior of South Africa?

.....



(b) Give any **one** effect of that great movement in (a) above.

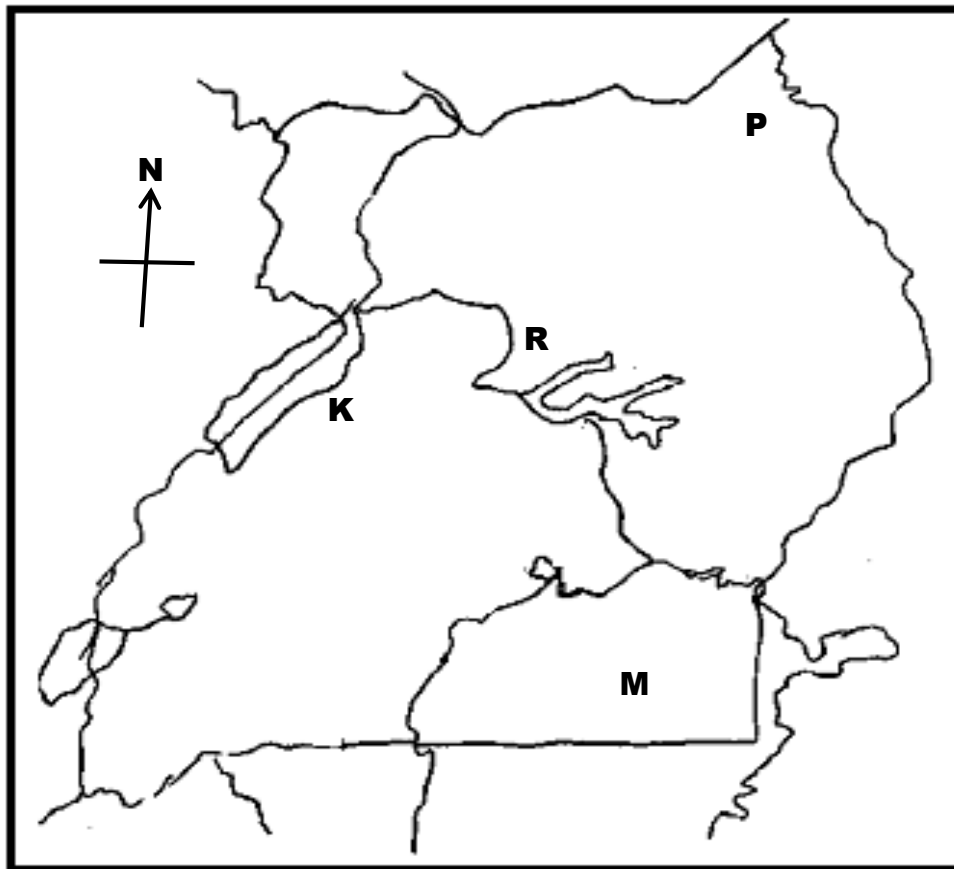
.....  
.....

(c) Write down **two** factors that led to Mfecane in South Africa

(i) .....

(ii) .....

43. Below is a sketch map of Uganda. Study it carefully and answer the questions that follow.



(a) Name any **one** district found in area marked R.

.....

(b) In which way does the formation of Lake K differ from that of Lake M?

.....  
.....

(c) Write down any **two** tourist attractions located in region P.

(i) .....

(ii) .....

44. (a) In which way did the construction of the Uganda Railway help the British to colonise Uganda?

.....  
.....

(b) Why was the Uganda Railway extended to the following parts of Uganda?

(i) Kasese

.....  
.....

(ii) Tororo

.....  
.....

(c) Mention any **one** problem that was faced by the constructors of the Uganda Railway.

.....  
.....

45. (a) Name **one** tribe in East Africa that actively participated in the Long Distance Trade.

.....

(b) Write down **one** main trade item in the Long Distance Trade?

.....

(c) Mention **two** effects of Long Distance Trade on the people of East Africa.

(i) .....

(ii) .....

46. (a) Why do traffic officers always arrest drunk drivers?

.....  
.....

(b) Besides driving under the influence of alcohol, give two other causes of road accidents.

(i) .....

(ii) .....

(c) Of what importance is a lollipop man at school?

.....  
.....

47. Match the countries in list B to the types of climate in list A.

**List A**

**List B**

Desert climate

Cameroon

Mediterranean climate

Botswana

Tropical climate

Uganda

Savanna climate

Algeria

Desert climate .....

Mediterranean climate .....

Tropical climate .....

Savanna climate .....

48. (a) Apart from Legislature, name two other organs of a democratic government.

(i) .....

(ii) .....

(b) Mention two duties of a government to its citizens.

(i) .....

(ii) .....

49. (a) Why is internet not a common means of mass media in Africa?

.....  
.....

(b) Besides internet, name two other examples of mass media.

(i) .....

(ii) .....

(c) How does the use of internet negatively affect culture in Uganda?

.....  
.....

50. (a) Name any two non-renewable resources in the environment.

(i) .....

(ii) .....

(b) How can motorcar drivers help in conservation of non-renewable resources?

.....  
.....

(c) Why is water regarded as a renewable resource?

.....  
.....

For questions 51 - 55, answer **EITHER** the Christian **OR** the Islamic questions **but not both**. No marks will be awarded to a candidate who attempts **both alternatives** in a particular number.

51. **EITHER:**

(a) What does the term “gospel” mean?

.....  
.....

(b) Name any **two** gospel writers.

(i) .....

(ii) .....

(c) Which angel Gabriel sometimes called Christmas angel?

.....

**OR:**

(a) Who is a Caliph?

.....  
.....

(b) Name any **two** Caliphs you know.

(i) .....

(ii) .....

(C) What was the work of Caliphs?

.....  
.....

EITHER:

(a) Mention any **two** qualities of a good samaritan.

(i) .....

(ii) .....

(b) Name **two** prophets in the holy bible.

(i) .....

(ii) .....

OR:

Mention any **two** qualities of a good Muslim.

(i) .....


(ii) .....

(b) Name **two** prophets in Islamic faith.

(i) .....

(ii) .....

53. EITHER:



(a) Give any **one** way how Christians prepare for prayers.

.....  
.....

(b) How is Baptism important in Christianity?

.....  
.....

(c) Mention any **two** types of Baptism.

(i) .....

(ii) .....

**OR:**

(a) Why do Muslims remove their shoes before entering a mosque?

.....  
.....

(b) When do Muslims perform Tayammum?

.....  
.....

(c) Name **two** types of Salah in Islam.

(i) .....

(ii) .....

54. **EITHER**

(a) Write down two books in the Old Testament of the Holy Bible

(i) .....

(ii) .....

(b) Why is Mount Horeb remembered in the history of Christianity?

.....

(c) Why did Jesus Christ come to the Earth?

.....

**OR:**

(a) Write down two reasons why every Muslim should make pilgrimage to Mecca.

(i) .....

(ii) .....

(b) When do Muslims perform the following journeys?

(i) Umrah .....

(ii) Hajj

.....

**55. FOR BOTH:**

(a) What is a talent?

.....

.....

(b) Write down any two ways people benefit from their talents.


(i) .....

(ii) .....

(c) Why is stealing not called a talent?

.....

.....



**END**